



UNIVERSITY OF CAMBRIDGE INTERNATIONAL EXAMINATIONS
General Certificate of Education Advanced Level


CANDIDATE
NAME

CENTRE
NUMBER

--	--	--	--	--	--

CANDIDATE
NUMBER

--	--	--	--	--



PHYSICS

9702/52

Paper 5 Planning, Analysis and Evaluation

May/June 2013

1 hour 15 minutes

Candidates answer on the Question Paper.

No Additional Materials are required.

READ THESE INSTRUCTIONS FIRST

Write your Centre number, candidate number and name on all the work you hand in.

Write in dark blue or black pen.

You may use a pencil for any diagrams, graphs or rough working.

Do not use staples, paper clips, highlighters, glue or correction fluid.

DO NOT WRITE IN ANY BARCODES.

Answer **all** questions.

Electronic calculators may be used.

You may lose marks if you do not show your working or if you do not use appropriate units.

At the end of the examination, fasten all your work securely together.

The number of marks is given in brackets [] at the end of each question or part question.

This document consists of **8** printed pages.



- 1 A student is investigating how the peak alternating current I_0 varies with frequency f in a circuit containing a coil of wire.

For
Examiner's
Use

It is suggested that

$$\left(\frac{V_0}{I_0}\right)^2 = R^2 + 4\pi^2 f^2 L^2$$

where R is the resistance of the coil, V_0 is the peak voltage and L is a constant.

Design a laboratory experiment to test the relationship between I_0 and f and determine a value for L . You should draw a diagram, on page 3, showing the arrangement of your equipment. In your account you should pay particular attention to

- (a) the procedure to be followed,
- (b) the measurements to be taken,
- (c) the control of variables,
- (d) the analysis of the data,
- (e) the safety precautions to be taken.

[15]

Diagram

For
Examiner's
Use

.....

.....

.....

.....

.....

.....

.....

.....

.....

.....

.....

.....

.....

.....

.....

.....

.....

.....

.....

.....

.....

.....

.....

.....

.....

.....

.....

.....

.....

.....

.....

.....

.....

.....

.....

.....

.....

.....

.....

.....

.....

.....

.....

.....

.....

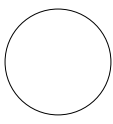
.....

.....

.....

.....

For Examiner's Use	Defining the problem	Methods of data collection	Method of analysis	Safety considerations	Additional detail



- 2 An electron beam is accelerated by a voltage V before entering a uniform electric field of electric field strength E between two parallel plates.

The electron beam travels a horizontal distance a parallel to the plates before hitting the top plate after being deflected through a vertical distance b . The path of the electrons is shown in Fig. 2.1.

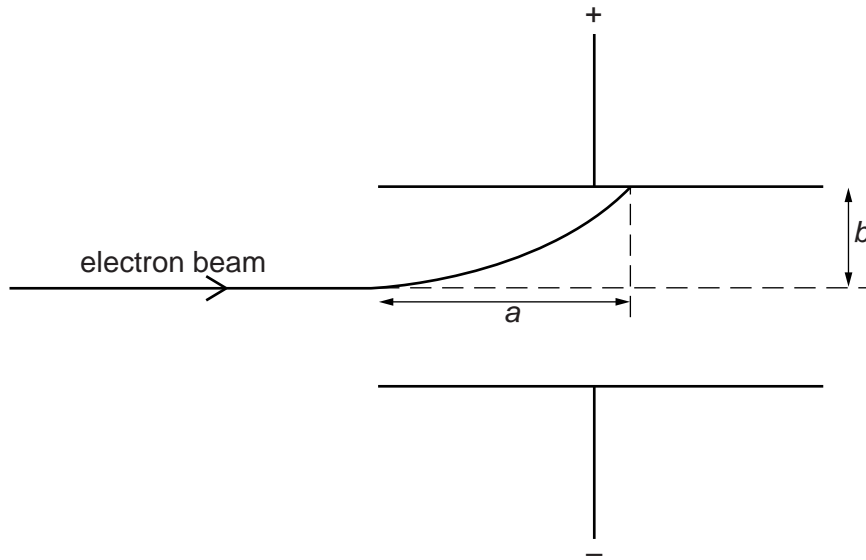


Fig. 2.1

For different values of V , the horizontal distance a is recorded.

Question 2 continues on the next page.

It is suggested that V and a are related by the equation

$$a = \sqrt{\frac{4Vb}{E}}$$

For
Examiner's
Use

- (a) A graph is plotted of a^2 on the y -axis against V on the x -axis. Determine an expression for the gradient in terms of E .

gradient = [1]

- (b) Values of V and a are given in Fig. 2.2.

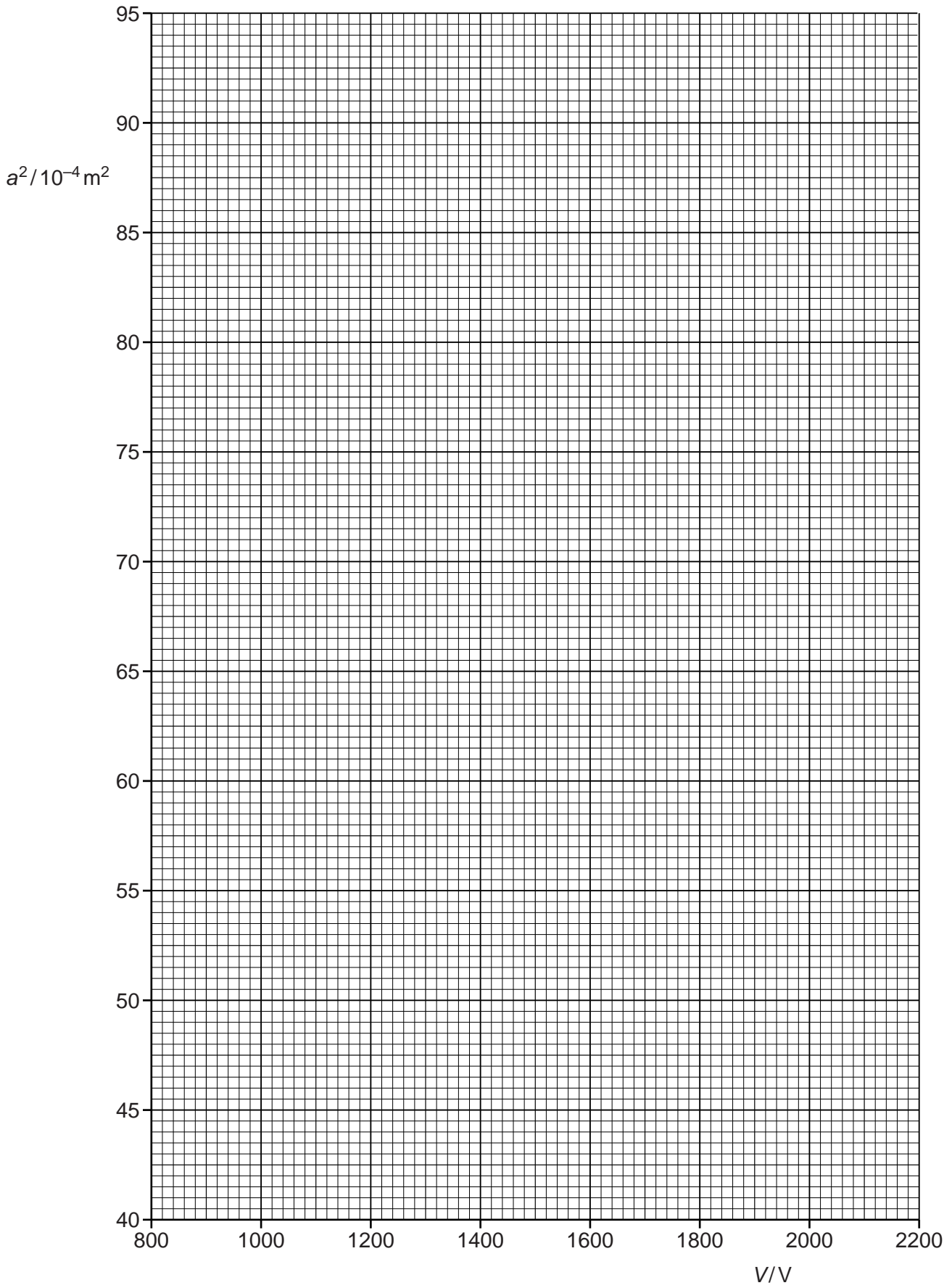
V/V	$a/10^{-2}\text{m}$	
1000	6.6 ± 0.1	
1200	7.2 ± 0.1	
1400	7.8 ± 0.1	
1600	8.4 ± 0.1	
1800	8.9 ± 0.1	
2000	9.4 ± 0.1	

Fig. 2.2

Calculate and record values of $a^2/10^{-4}\text{m}^2$ in Fig. 2.2. Include the absolute uncertainties in a^2 . [3]

- (c) (i) Plot a graph of $a^2/10^{-4}\text{m}^2$ against V/V . Include error bars for a^2 . [2]
- (ii) Draw the straight line of best fit and a worst acceptable straight line on your graph. Both lines should be clearly labelled. [2]
- (iii) Determine the gradient of the line of best fit. Include the uncertainty in your answer.

gradient = [2]



For
Examiner's
Use

- (d) (i) Using your answer to (c)(iii), determine a value for E . Include an appropriate unit in your answer.

Data: $b = (4.0 \pm 0.1) \times 10^{-2} \text{ m}$

For
Examiner's
Use

$E = \dots\dots\dots [2]$

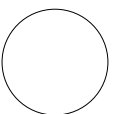
- (ii) Determine the percentage uncertainty in your value of E .

percentage uncertainty = $\dots\dots\dots\%$ [1]

--

- (e) Using your answers to (d), determine a value for V to give a distance $a = 5.0 \pm 0.1 \text{ cm}$. Include the absolute uncertainty in your answer.

$V = \dots\dots\dots V [2]$



Permission to reproduce items where third-party owned material protected by copyright is included has been sought and cleared where possible. Every reasonable effort has been made by the publisher (UCLES) to trace copyright holders, but if any items requiring clearance have unwittingly been included, the publisher will be pleased to make amends at the earliest possible opportunity.

University of Cambridge International Examinations is part of the Cambridge Assessment Group. Cambridge Assessment is the brand name of University of Cambridge Local Examinations Syndicate (UCLES), which is itself a department of the University of Cambridge.